


DECEMBER DAILY math journal



1st

December
by: _____
December 1st

December
by: _____
December 2nd

Mom put 7 ornaments on the tree today. Now there are 13 ornaments total. How many did she put on the tree yesterday?

Coins and Amounts
_____ \$ _____
_____ dime quarter nickel

Coins and Amounts
_____ \$ _____
_____ dime quarter nickel

Find the difference.
 $18 - 5 =$ $16 - 4 =$ $9 - 1 =$ $12 - 9 =$

Find the difference.
 $18 - 5 =$ $78 - 113 =$ $39 - 42 =$ $68 - 31 =$ $79 - 42 =$


Circle the shapes that make the object.

Circle the shapes that make the object.

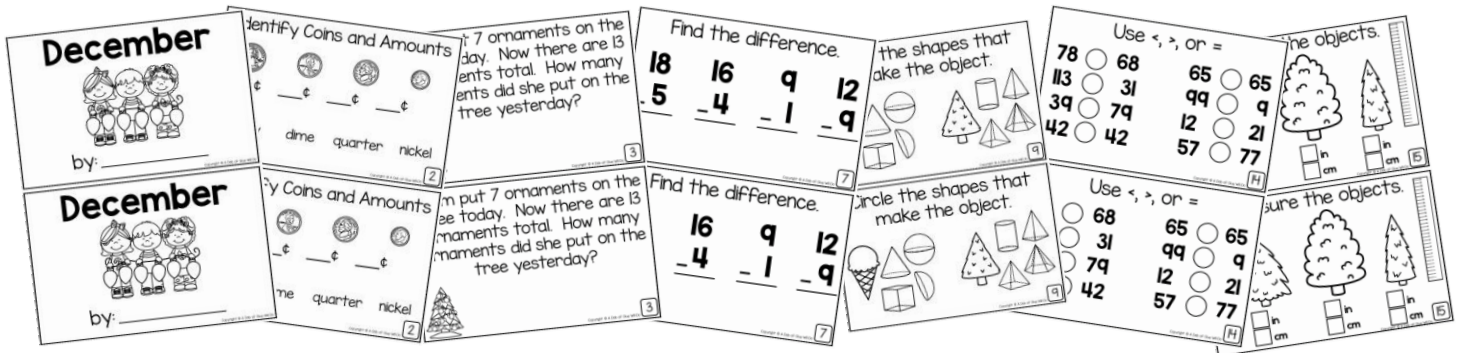
Use <, >, =

Use <, >, =


65 ○ 65 99 ○ 9
12 ○ 21 57 ○ 77



QUICK, MATH REVIEW FOR EVERYDAY OF THE MONTH



**GET THE BUNDLE AND GET ONE...
FOR EVERY MONTH**



**plus more journals...
FOR EVERY STANDARD
coming soon**

