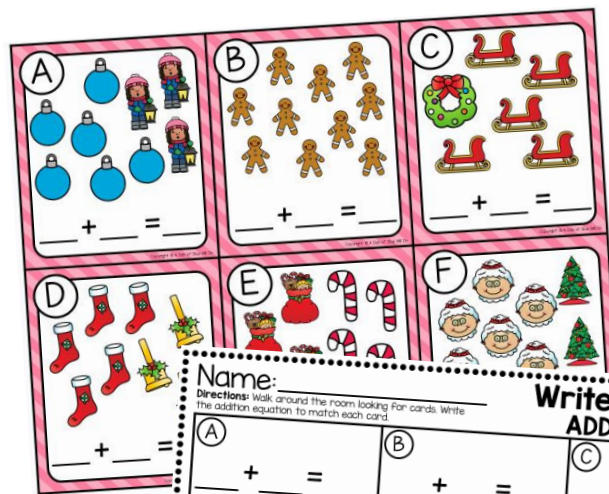


DECK



THE HALLS



Name: _____

Directions: Walk around the room looking for cards. Write the addition equation to match each card.

Write the Room ADDING TO 10		
(A) _____ + _____ = _____	(B) _____ + _____ = _____	(C) _____ + _____ = _____
(D) _____ + _____ = _____	(E) _____ + _____ = _____	(F) _____ + _____ = _____
(G) _____ + _____ = _____	(H) _____ + _____ = _____	(I) _____ + _____ = _____
(J) _____ + _____ = _____	(K) _____ + _____ = _____	(L) _____ + _____ = _____

a DAB of GLUE will do 

FREEBIE 3

1st

DECEMBER ADDING TO 10 WRITE THE ROOM DIRECTIONS

Objective: Students will find sums to 10.

Teacher can use cards as a write the room activity or put in a basket/on a ring to use as task cards in a center.

- 1) Cut the cards and tape/hang them around the room at eye level for your students.
- 2) Give your students the recording sheet that matches their skill level.
- 3) Students will walk around the room and find each card, follow the directions, and record the answer in the corresponding section on the recording sheet.

QUICK DIFFERENTIATION


KIDS THAT NEED A CHALLENGE:

- 1) Give students the recording sheet that has them write the equation.
- 2) Have students say or write a word problem to match the equation.

KIDS THAT NEED A REVIEW:

- 1) Give students the recording sheet that has them trace the equation.
- 2) Work with students in a small group to review addition, using manipulatives to help students visualize each equation.


A



$$\underline{\quad} + \underline{\quad} = \underline{\quad}$$

Copyright © A Dab of Glue Will Do

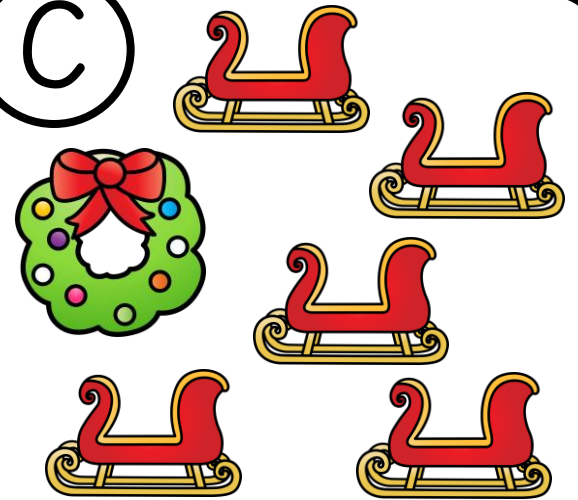
B



$$\underline{\quad} + \underline{\quad} = \underline{\quad}$$

Copyright © A Dab of Glue Will Do

C



$$\underline{\quad} + \underline{\quad} = \underline{\quad}$$

Copyright © A Dab of Glue Will Do


D



$$\underline{\quad} + \underline{\quad} = \underline{\quad}$$

Copyright © A Dab of Glue Will Do


E



$$\underline{\quad} + \underline{\quad} = \underline{\quad}$$

Copyright © A Dab of Glue Will Do

F



$$\underline{\quad} + \underline{\quad} = \underline{\quad}$$

Copyright © A Dab of Glue Will Do

G

_____ + _____ = _____

Copyright © A Dab of Glue Will Do

H

_____ + _____ = _____

Copyright © A Dab of Glue Will Do

I

_____ + _____ = _____

Copyright © A Dab of Glue Will Do

J

_____ + _____ = _____

Copyright © A Dab of Glue Will Do

K

_____ + _____ = _____


Copyright © A Dab of Glue Will Do

L

_____ + _____ = _____

Copyright © A Dab of Glue Will Do


A



$$\underline{\quad} + \underline{\quad} = \underline{\quad}$$

Copyright © A Dab of Glue Will Do

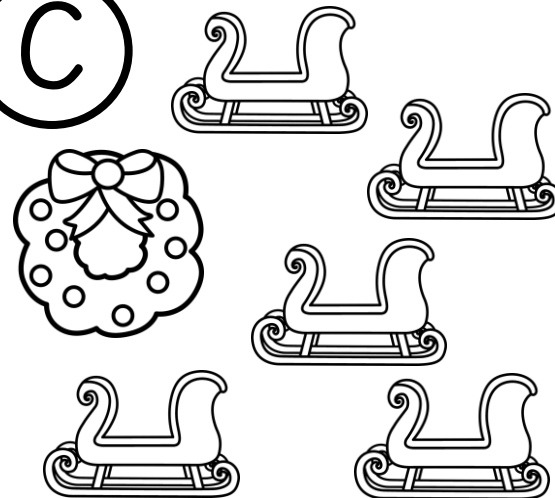
B



$$\underline{\quad} + \underline{\quad} = \underline{\quad}$$

Copyright © A Dab of Glue Will Do

C



$$\underline{\quad} + \underline{\quad} = \underline{\quad}$$

Copyright © A Dab of Glue Will Do


D



$$\underline{\quad} + \underline{\quad} = \underline{\quad}$$

Copyright © A Dab of Glue Will Do


E



$$\underline{\quad} + \underline{\quad} = \underline{\quad}$$

Copyright © A Dab of Glue Will Do

F



$$\underline{\quad} + \underline{\quad} = \underline{\quad}$$

Copyright © A Dab of Glue Will Do

G

_____ + _____ = _____

Copyright © A Dab of Glue Will Do

H

_____ + _____ = _____

Copyright © A Dab of Glue Will Do

I

_____ + _____ = _____

Copyright © A Dab of Glue Will Do

J

_____ + _____ = _____

Copyright © A Dab of Glue Will Do

K

_____ + _____ = _____

Copyright © A Dab of Glue Will Do

L

_____ + _____ = _____

Copyright © A Dab of Glue Will Do

Name: _____

Write the Room

ADDING TO 10

Directions: Walk around the room looking for cards. Trace the addition equation to match each card.

(A)

$$6 + 3 = 9$$

(B)

$$10 + 0 = 10$$

(C)

$$1 + 5 = 6$$

(D)

$$5 + 3 = 8$$

(E)

$$4 + 4 = 8$$

(F)

$$7 + 2 = 9$$

(G)

$$3 + 3 = 6$$

(H)

$$1 + 8 = 9$$

(I)

$$3 + 5 = 8$$

(J)

$$6 + 1 = 7$$

(K)

$$7 + 3 = 10$$

(L)

$$4 + 5 = 9$$

Name: _____

Directions: Walk around the room looking for cards. Write the addition equation to match each card.

Write the Room

ADDING TO 10

(A)

$$\underline{\quad} + \underline{\quad} = 9$$

(B)

$$\underline{\quad} + \underline{\quad} = 10$$

(C)

$$\underline{\quad} + \underline{\quad} = 6$$

(D)

$$\underline{\quad} + \underline{\quad} = 8$$

(E)

$$\underline{\quad} + \underline{\quad} = 8$$

(F)

$$\underline{\quad} + \underline{\quad} = 9$$

(G)

$$\underline{\quad} + \underline{\quad} = 6$$

(H)

$$\underline{\quad} + \underline{\quad} = 9$$

(I)

$$\underline{\quad} + \underline{\quad} = 8$$

(J)

$$\underline{\quad} + \underline{\quad} = 7$$

(K)

$$\underline{\quad} + \underline{\quad} = 10$$

(L)

$$\underline{\quad} + \underline{\quad} = 9$$

Name: _____

Write the Room

ADDING TO 10

Directions: Walk around the room looking for cards. Write the addition equation to match each card.

(A)

$$\underline{\quad} + \underline{\quad} = \underline{\quad}$$

(B)

$$\underline{\quad} + \underline{\quad} = \underline{\quad}$$

(C)

$$\underline{\quad} + \underline{\quad} = \underline{\quad}$$

(D)

$$\underline{\quad} + \underline{\quad} = \underline{\quad}$$

(E)

$$\underline{\quad} + \underline{\quad} = \underline{\quad}$$

(F)

$$\underline{\quad} + \underline{\quad} = \underline{\quad}$$

(G)

$$\underline{\quad} + \underline{\quad} = \underline{\quad}$$

(H)

$$\underline{\quad} + \underline{\quad} = \underline{\quad}$$

(I)

$$\underline{\quad} + \underline{\quad} = \underline{\quad}$$

(J)

$$\underline{\quad} + \underline{\quad} = \underline{\quad}$$

(K)

$$\underline{\quad} + \underline{\quad} = \underline{\quad}$$

(L)

$$\underline{\quad} + \underline{\quad} = \underline{\quad}$$

Name: _____

Write the Room

ADDING TO 10

Directions: Walk around the room looking for cards. Write the addition equation to match each card.

(A)	(B)	(C)
(D)	(E)	(F)
(G)	(H)	(I)
(J)	(K)	(L)

WANT MORE?

Buy this First Grade
Write the Room Bundle
and **SAVE BIG!**



MEGA BUNDLE

write the room

bat cap

1st

Write the Room
MIXED DIGRAPHS

lunch	fish	rash
bath	beach	booth
bench	tooth	brush
mouth	leash	church

spring is here
next month is may?
what do you...

